



Use the numberlines to round each number to the nearest 100.

Ex)

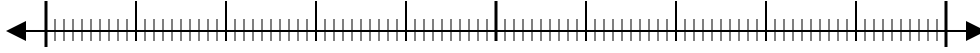
25,932



Ex. 25,900

1)

28,551



1. \_\_\_\_\_

2)

854



2. \_\_\_\_\_

3)

831



3. \_\_\_\_\_

4)

274



4. \_\_\_\_\_

5)

12,793



5. \_\_\_\_\_

6)

5,558



6. \_\_\_\_\_

7)

5,688



7. \_\_\_\_\_

8)

134



8. \_\_\_\_\_

9)

9,335



9. \_\_\_\_\_

10)

36,045



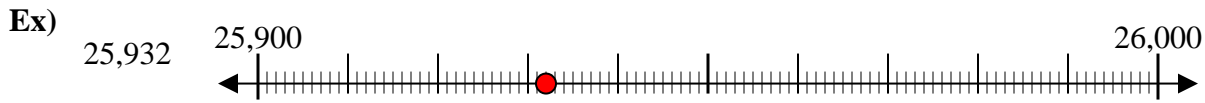
10. \_\_\_\_\_

Answers

- Ex. 25,900
- 1. \_\_\_\_\_
- 2. \_\_\_\_\_
- 3. \_\_\_\_\_
- 4. \_\_\_\_\_
- 5. \_\_\_\_\_
- 6. \_\_\_\_\_
- 7. \_\_\_\_\_
- 8. \_\_\_\_\_
- 9. \_\_\_\_\_
- 10. \_\_\_\_\_



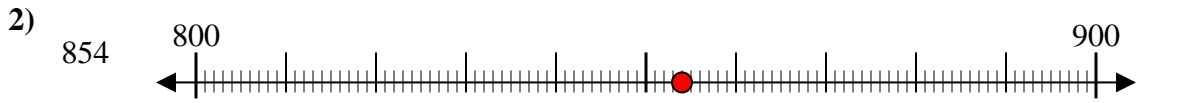
Use the numberlines to round each number to the nearest 100.



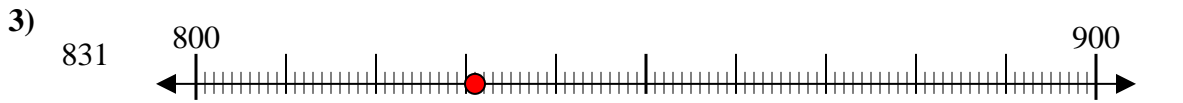
Answers  
 Ex. 25,900



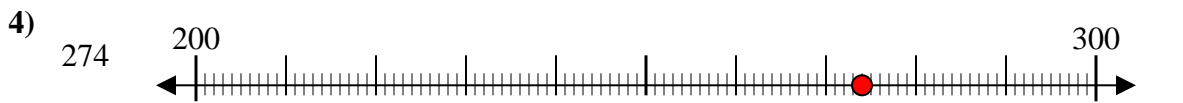
1. 28,600



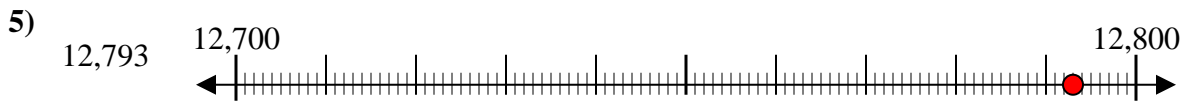
2. 900



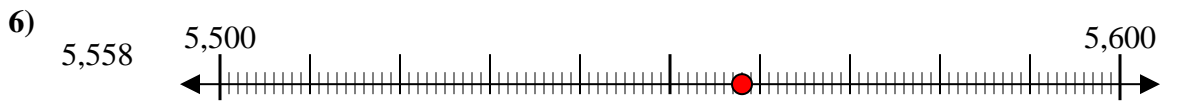
3. 800



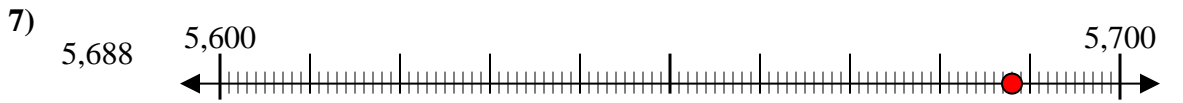
4. 300



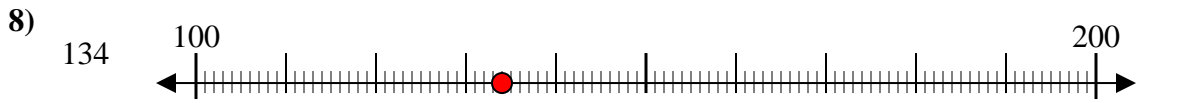
5. 12,800



6. 5,600



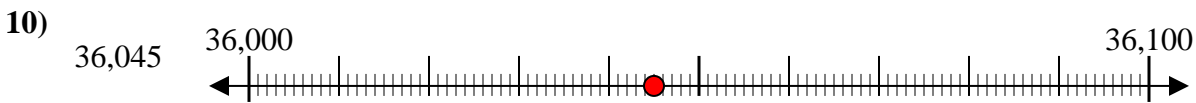
7. 5,700



8. 100



9. 9,300



10. 36,000



Use the numberlines to round each number to the nearest 100.

Ex)

25,932



Ex. 25,900

1)

28,551



1. \_\_\_\_\_

2)

854



2. \_\_\_\_\_

3)

831



3. \_\_\_\_\_

4)

274



4. \_\_\_\_\_

5)

12,793



5. \_\_\_\_\_

6)

5,558



6. \_\_\_\_\_

7)

5,688



7. \_\_\_\_\_

8)

134



8. \_\_\_\_\_

9)

9,335



9. \_\_\_\_\_

10)

36,045



10. \_\_\_\_\_

Answers

Ex. 25,900

1. \_\_\_\_\_

2. \_\_\_\_\_

3. \_\_\_\_\_

4. \_\_\_\_\_

5. \_\_\_\_\_

6. \_\_\_\_\_

7. \_\_\_\_\_

8. \_\_\_\_\_

9. \_\_\_\_\_

10. \_\_\_\_\_